


Estimating Weight


Estimate how much each object weighs.
Circle the answer that gives the best estimate.



10,000 pounds 10 pounds




15 ounces 15 pounds



1 pound 1 ounce



3,000 pounds 3 pounds



100 pounds 100 ounces



33 pounds 33 ounces

